

What did tobacco introduce to Virginia society?

Mapping rivers and mountain ranges in the west, recording facts and figures about Native American tribes, and collecting samples of unfamiliar animals and plants were all goals of what 19th century expedition?

What were the outcomes of Bacon's Rebellion?

What factors caused the North American colonies to shape themselves into three distinct regions?

This document was the first document to ban slavery in a state or territory of the United States?

New England was settled by people looking for religious freedom. What were characteristics of New England that allowed religious settlements in New England to grow?

To establish settlements along the coast of North America was the purpose of the _____, chartered by King James I in 1606.

The Battle of New Orleans occurred after what had already been signed to end the War of 1812?

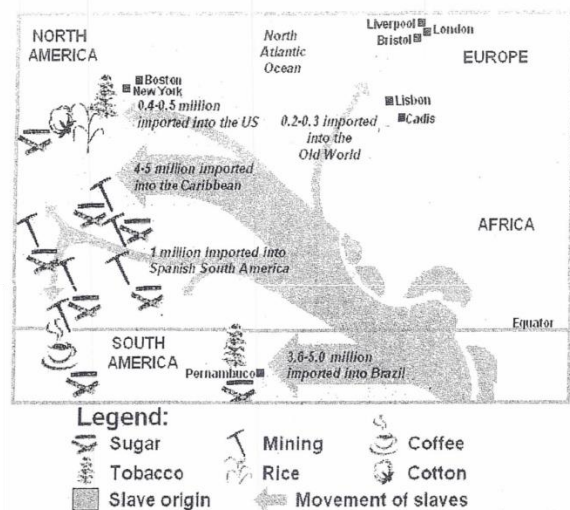
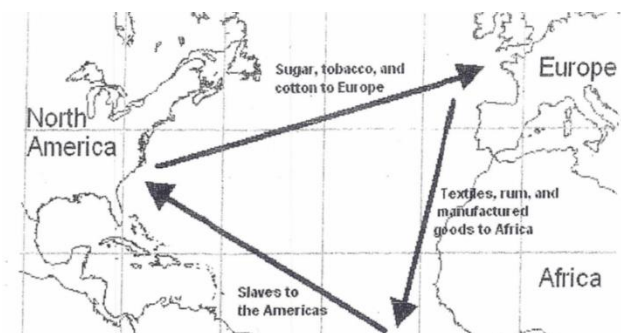
This Congressional Act showed that the United States was committed to expanding westward.

European powers stopped colonizing the Western Hemisphere and the US agreed to leave established European colonies alone were significant outcomes of what US foreign policy?

T / F - Fearing the Massachusetts Bay Company would declare independence, King Charles II revoked its charter and, following Charles' death, King James II created the Dominion of New England.

Based on the image and legend to the right, what can be surmised about the movement of slaves?

Based on the image below, what was the relationship between North America, Europe, and Africa with regards their economic activities?



Revivalism was a significant concept that was introduced to American society by evangelists during what religious phenomenon in American History?

How does John Locke's statement of "Life, Liberty, and Property" differ from the text in the Declaration of Independence?

President Jackson used what to provide jobs to political party supporters?

This make up of this house of the Legislative branch is based on population.

The president's power of veto is an example of what Constitutional principle?

The US military achievement in the War of 1812 weakened nationalistic sentiments. Is this statement true or false?

Proposing an equal number of senators per state was a result of this state's plan considered by the Constitutional Convention.

The abolitionist movement was the reform these ladies became involved with prior to the women's rights movement. The two ladies were...?

What was the goal of John Brown that fueled his raid on the armory at Harper's Ferry, Virginia, on October 16, 1859?

Place the following in Civil War era events in chronological order of occurrence: The Gettysburg Address, The Battle of Antietam, The Emancipation Proclamation, Appomattox Courthouse

How did the Continental Army emerge from the harsh winter in December of 1777 at Valley Forge?

What was the purpose of the Committees of Correspondence that was formed prior to the Revolutionary War?

The perception that President Jackson fought for and protected the average citizen did what to American nationalism during his presidency?

Colonists opposed the Stamp Act because it was an example of _____ Without _____.

Which American leader wanted to preserve the Union and declared certain slaves "free forever" following the Union's win at the Battle of Antietam issued the Emancipation Proclamation?

In 1846, David Wilmot of Pennsylvania submitted a proposal to Congress that would have outlawed slavery in which area?

Which Civil War battle marked the furthest point the confederate Army advanced into the North?

In order to protect against the potential tyranny of a central government, the Anti-Federalists argued that what should be added to the Constitution?

Which Union victory during the Civil War gave them total control of the Mississippi River?

Henry Clay, John C. Calhoun, and the other members in the House of Representatives that were eager to declare war on Great Britain were known as what?

The last section/paragraph of the Gettysburg Address, President Lincoln is reminding the people of what very important fact?

It was the geographical feature of Yorktown that played a significant role in the British defeat.

Which Civil War battle was the bloodiest day of battle in United States history?

Farmers refusing to pay the excise tax placed on whiskey by Congress was why this occurred in western Pennsylvania in 1794?

In 1854, Congress passed the Kansas-Nebraska Act, allowed for popular sovereignty with regards to the legalization of slavery. The Kansas-Nebraska Act repealed parts of which previous congressional decision/action?

The lack of taxing power along with establishing a weak federal government were issues related to this document.

What was Abraham Lincoln referring to when he said, "A house divided against itself cannot stand."?

To avoid conflicts between colonists and Native American Indians was the reason King George III did what?

Why was the book *Uncle Tom's Cabin*, written by Harriet Beecher Stowe and published in 1852, so important to the abolitionist movement?

Which Civil War General won the Battle of Atlanta and then began his famous March to the Sea?

The creation of a bicameral legislation at the Constitutional Convention was known as what? It also settled the issue of representation brought before the delegates of the Constitutional Convention.

Montesquieu's political theory of _____ of _____ had a significant influence on which US document?

The Battle of Gettysburg marked the last time the South would do what?

The 1783 Treaty of Paris did two things. What were they?

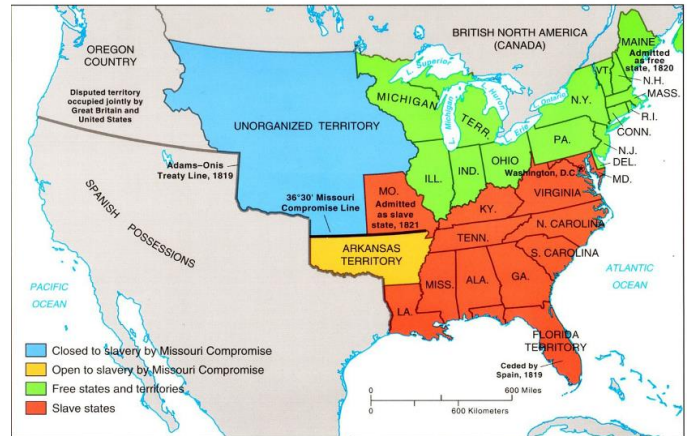
The Proclamation Act (1763); Sugar Act (1764); Stamp Act (1764); Stamp Act repealed & Declaratory Act (1766); Townshend Acts (1767); Boston Massacre (1770); Colonists burn Gaspee (1772); Tea Act & Boston Tea Party (1773); Coercive Acts/Intolerable Acts & First Continental Congress (1774); Battles of Lexington & Concord (April 19, 1775) were events that caused what?

Which Civil War leader was often named the greatest military leader of the Civil War, graduated from West Point, was known for his victory at Vicksburg, and led the Union forces during the latter half of the war?

The map on the right illustrates the impact of what Congressional Act on the United States?

Who was named the president of the Confederate States of America when the Southern states seceded from the Union in February of 1861?

Which Supreme Court case resulted with the Court ruling that stated blacks could not be considered citizens and also declared portions of the Missouri Compromise unconstitutional?



An industrial advantage was enjoyed by which side in the Civil War and thus caused the inability of the opposition to fight indefinitely?

Lincoln's main goal and hope for the United States can be clearly seen in the following excerpt from Lincoln's 2nd Inaugural Address: *"With malice towards none; with charity for all; with firmness in the right, as God gives us to see the right, let us strive to finish the work we are in; to bind up the nation's wounds...to do all which may achieve and cherish a just and lasting peace among ourselves, and with all nations..."*. What goal and hope of Lincoln is evident in the excerpt?

A concept that reflected the political climate in America can be clearly seen in the image to the right. What is that concept?

